

Der Zahlenraum bis 6

– Subtraktion –

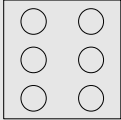



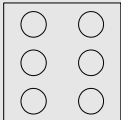




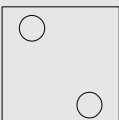


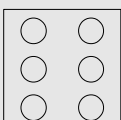
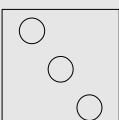


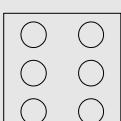
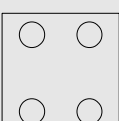



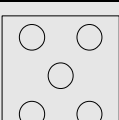



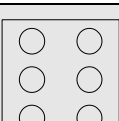


Schreibe die **Würfelaufgabe** auf!

Schreibe die Reichenzeichen nach (-, =)!

Subtrahiere die beiden Zahlen (Minuend - Subtrahend)!

Schreibe das Ergebnis (die Differenz) auf!

Male in den rechten Würfel die dem Ergebnis entsprechende Punktzahl.

	-			
	-			
	-			
	-			
	-			
	-			
	-			

Der Zahlenraum bis 6

– Subtraktion –

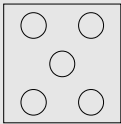

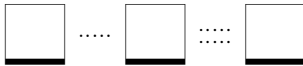

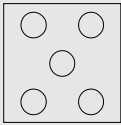

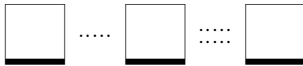

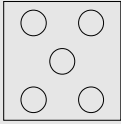
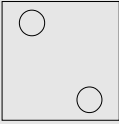
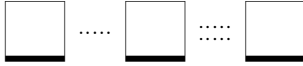

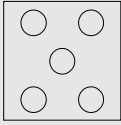
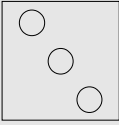
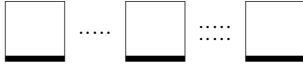

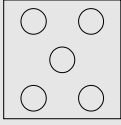
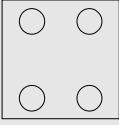


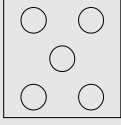
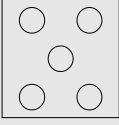


Schreibe die **Würfelaufgabe** auf!

Schreibe die Reichenzeichen nach (-, =)!

Subtrahiere die beiden Zahlen (Minuend - Subtrahend)!

Schreibe das Ergebnis (die Differenz) auf!

Male in den rechten Würfel die dem Ergebnis entsprechende Punktzahl.

	—			
	—			
	—			
	—			
	—			
	—			

Der Zahlenraum bis 6

– Subtraktion –

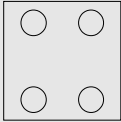




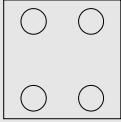


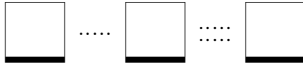

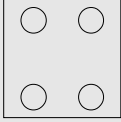

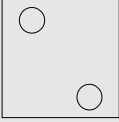


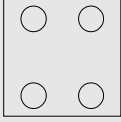

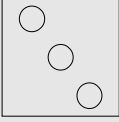


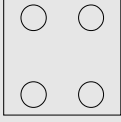

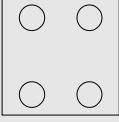


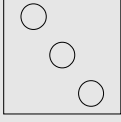




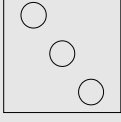

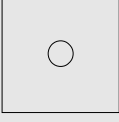


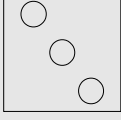

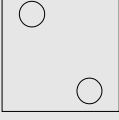


Schreibe die **Würfelaufgabe** auf!

Schreibe die Reichenzeichen nach (-, =)!

Subtrahiere die beiden Zahlen (Minuend - Subtrahend)!

Schreibe das Ergebnis (die Differenz) auf!

Male in den rechten Würfel die dem Ergebnis entsprechende Punktzahl.

Der Zahlenraum bis 6

– Subtraktion –

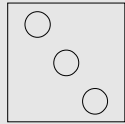

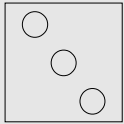
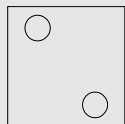


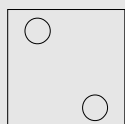

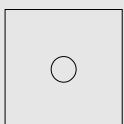
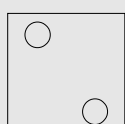

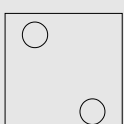
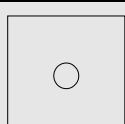


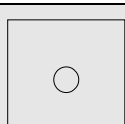


Schreibe die **Würfelaufgabe** auf!

Schreibe die Reichenzeichen nach (-, =)!

Subtrahiere die beiden Zahlen (Minuend - Subtrahend)!

Schreibe das Ergebnis (die Differenz) auf!

Male in den rechten Würfel die dem Ergebnis entsprechende Punktzahl.

			<input type="text"/> <input type="text"/> <input type="text"/>	<input type="text"/>
			<input type="text"/> <input type="text"/> <input type="text"/>	<input type="text"/>
			<input type="text"/> <input type="text"/> <input type="text"/>	<input type="text"/>
			<input type="text"/> <input type="text"/> <input type="text"/>	<input type="text"/>
			<input type="text"/> <input type="text"/> <input type="text"/>	<input type="text"/>
			<input type="text"/> <input type="text"/> <input type="text"/>	<input type="text"/>