

Der Zahlenraum bis 10

– Addition –

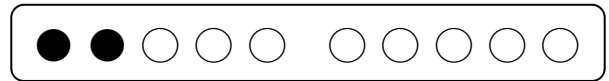
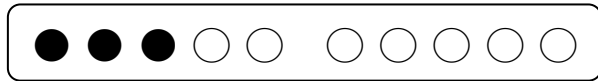
Hinweise

- Diese Aufgabensammlung umfasst alle Additionsaufgaben (inklusive Tauschaufgaben) im Zahlenraum bis 10.
- Die/der Schüler/-in soll
 - ❖ zuerst anhand des Zehnerstreifens den linken Summanden erfassen und aufschreiben,
 - ❖ das Pluszeichen nachschreiben,
 - ❖ dann den rechten Summanden erfassen und aufschreiben,
 - ❖ das Gleichheitszeichen nachschreiben und
 - ❖ abschließend die Summe (das Ergebnis) aufschreiben.
- Sollte ein Abzählen des zu erfassenden Summanden notwendig sein, beginnt die/der Schüler/-in immer links (beim ersten Punkt) zu zählen.
- Fällt einer/einem Schüler/-in auf, dass es Aufgaben gibt, bei denen die Summanden getauscht wurden und somit die Summe gleich ist, kann das Kommutativgesetz (Vertauschungsgesetz; *Tauschaufgabe*) erläutert werden.


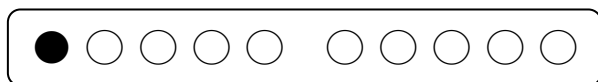
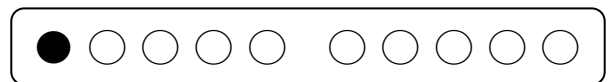
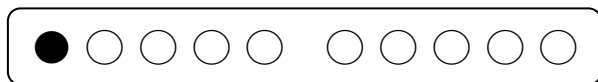

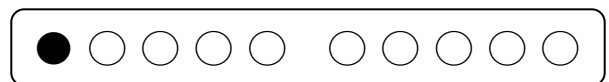
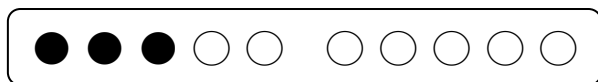
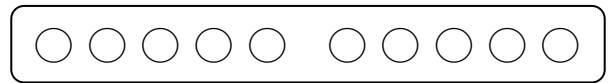
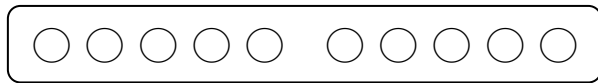
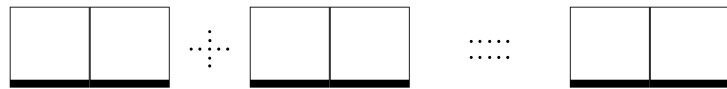
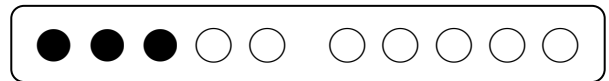
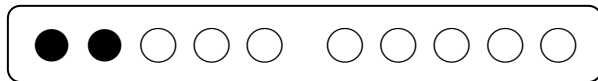
Der Zahlenraum bis 10

– Addition –

Schreibe die Aufgabe (auch die Rechenzeichen)!
 Addiere die beiden Zahlen (Summanden) und
 schreibe das Ergebnis (Summe) auf!




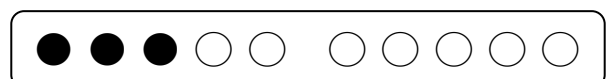
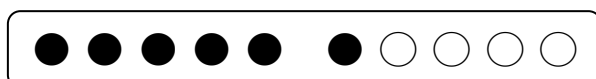
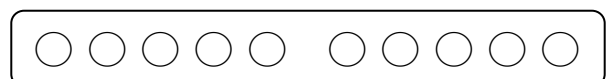
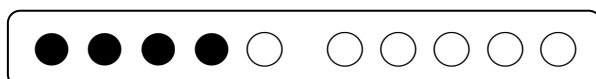

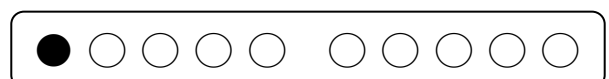
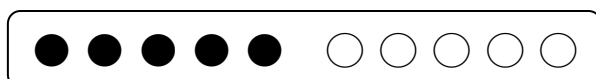
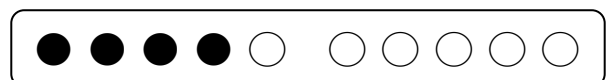
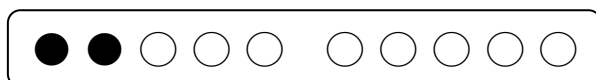
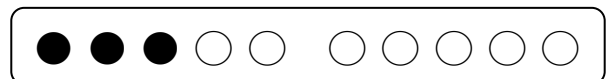
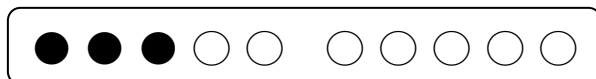

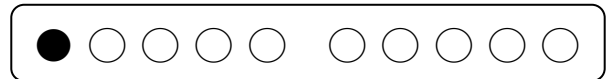
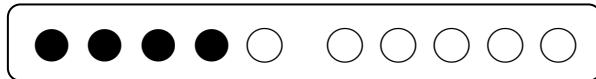
$$3 + 2 = 5$$



Der Zahlenraum bis 10

– Addition –




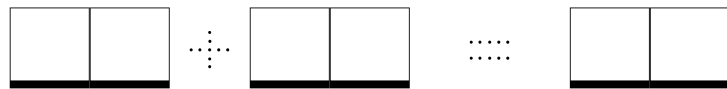


Schreibe die Aufgabe (auch die Rechenzeichen)!
 Addiere die beiden Zahlen (Summanden) und
 schreibe das Ergebnis (Summe) auf!



Der Zahlenraum bis 10

– Addition –



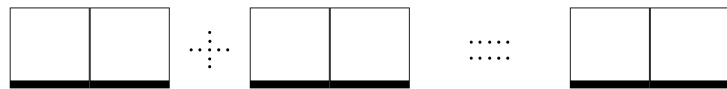


Schreibe die Aufgabe (auch die Rechenzeichen)!
 Addiere die beiden Zahlen (Summanden) und
 schreibe das Ergebnis (Summe) auf!



Der Zahlenraum bis 10

– Addition –


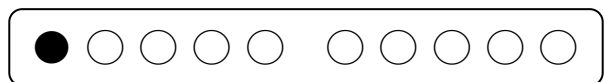
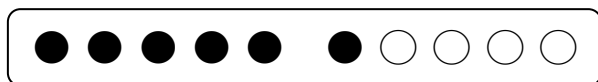

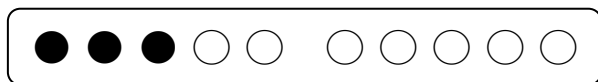

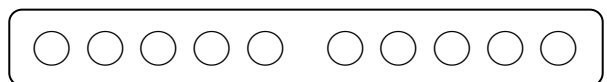
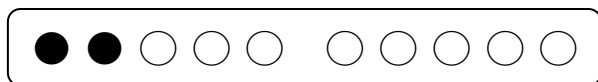
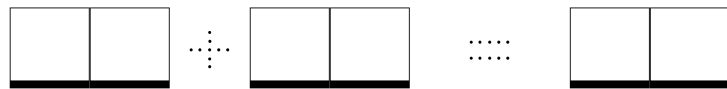
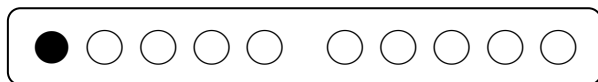

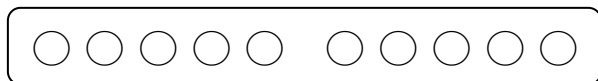

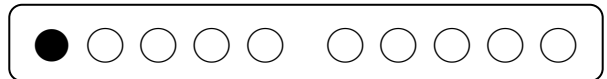
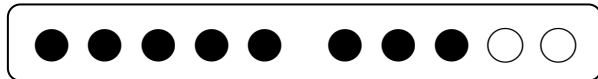
Schreibe die Aufgabe (auch die Rechenzeichen)!
 Addiere die beiden Zahlen (Summanden) und
 schreibe das Ergebnis (Summe) auf!



Der Zahlenraum bis 10

– Addition –


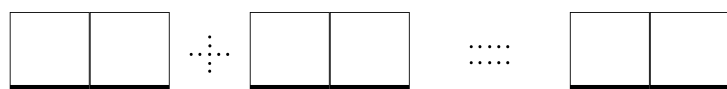


Schreibe die Aufgabe (auch die Rechenzeichen)!
 Addiere die beiden Zahlen (Summanden) und
 schreibe das Ergebnis (Summe) auf!



Der Zahlenraum bis 10

– Addition –


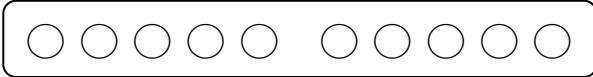





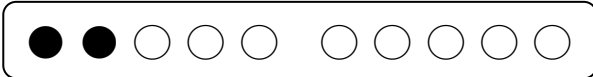




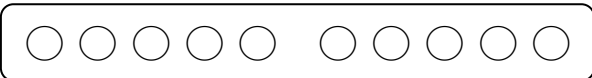






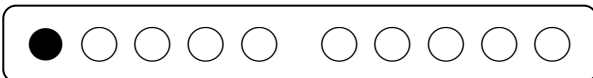




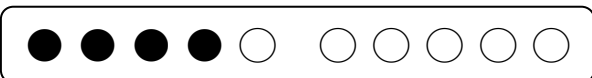
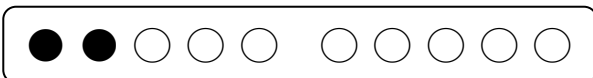




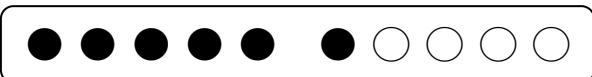
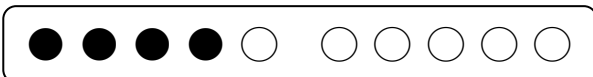




Schreibe die Aufgabe (auch die Rechenzeichen)!
 Addiere die beiden Zahlen (Summanden) und
 schreibe das Ergebnis (Summe) auf!



Der Zahlenraum bis 10

– Addition –


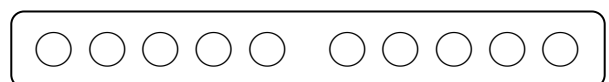
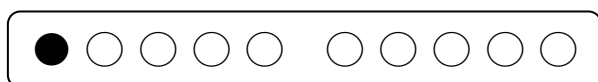

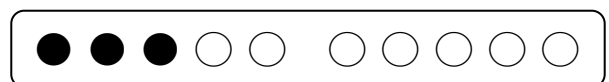
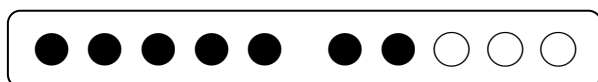

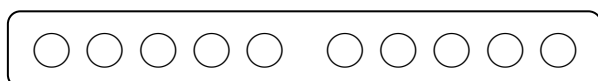
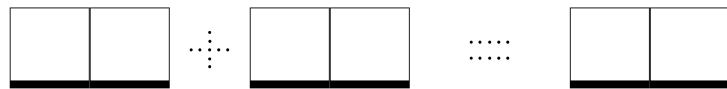
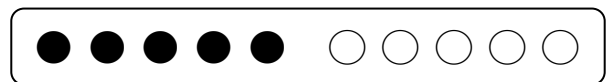
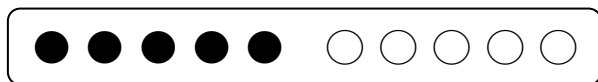

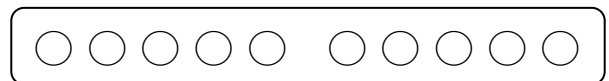
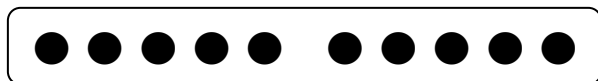
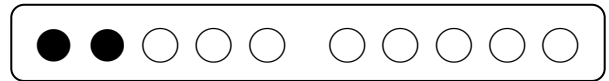
Schreibe die Aufgabe (auch die Rechenzeichen)!
 Addiere die beiden Zahlen (Summanden) und
 schreibe das Ergebnis (Summe) auf!

	
	$+$ 
	$=$ 
	
	$+$ 
	$=$ 
	
	$+$ 
	$=$ 
	
	$+$ 
	$=$ 
	
	$+$ 
	$=$ 
	
	$+$ 
	$=$ 

Der Zahlenraum bis 10

– Addition –



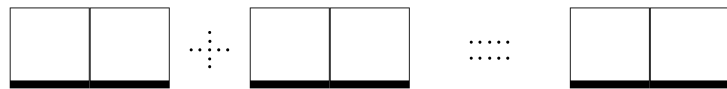


Schreibe die Aufgabe (auch die Rechenzeichen)!
 Addiere die beiden Zahlen (Summanden) und
 schreibe das Ergebnis (Summe) auf!



Der Zahlenraum bis 10

– Addition –



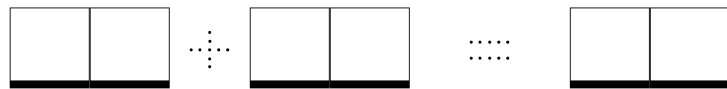


Schreibe die Aufgabe (auch die Rechenzeichen)!
 Addiere die beiden Zahlen (Summanden) und
 schreibe das Ergebnis (Summe) auf!



Der Zahlenraum bis 10

– Addition –

Schreibe die Aufgabe (auch die Rechenzeichen)!
 Addiere die beiden Zahlen (Summanden) und
 schreibe das Ergebnis (Summe) auf!



Der Zahlenraum bis 10

– Addition –

Schreibe die Aufgabe (auch die Rechenzeichen)!
 Addiere die beiden Zahlen (Summanden) und
 schreibe das Ergebnis (Summe) auf!

