

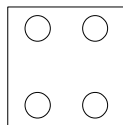
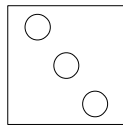
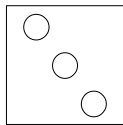
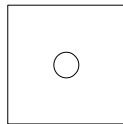
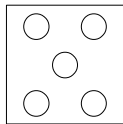
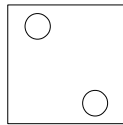
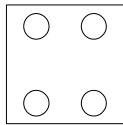
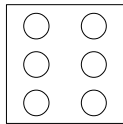
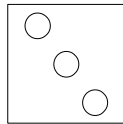
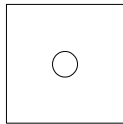
# Der Zahlenraum bis 6

## – Addition –

Addiere die beiden Würfelbilder!

Schreibe das Pluszeichen und das Gleichheitszeichen nach!

Trage das Ergebnis (die Summe) in das Kästchen ein!



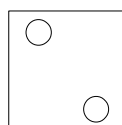
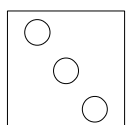
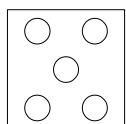
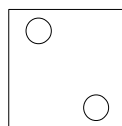
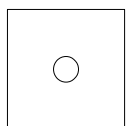
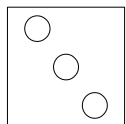
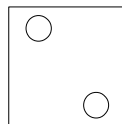
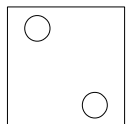
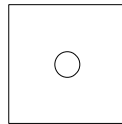
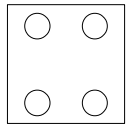
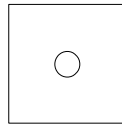

# Der Zahlenraum bis 6

## – Addition –

Addiere die beiden Würfelbilder!

Schreibe das Pluszeichen und das Gleichheitszeichen nach!

Trage das Ergebnis (die Summe) in das Kästchen ein!



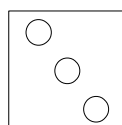

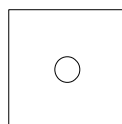
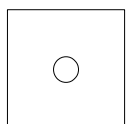
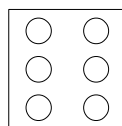

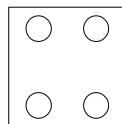
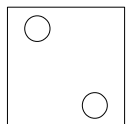
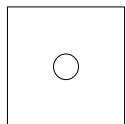
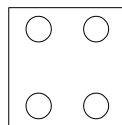
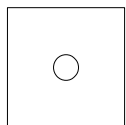
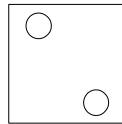

# Der Zahlenraum bis 6

## – Addition –

Addiere die beiden Würfelbilder!

Schreibe das Pluszeichen und das Gleichheitszeichen nach!

Trage das Ergebnis (die Summe) in das Kästchen ein!



# Der Zahlenraum bis 6

## – Addition –

Addiere die beiden Würfelbilder!  
Schreibe das Pluszeichen und das Gleichheitszeichen nach!  
Trage das Ergebnis (die Summe) in das Kästchen ein!

